

RELÓGIOS

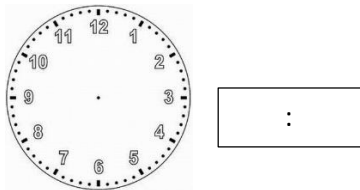
Resolve se fores capaz e envia para o

Clube da Matemática

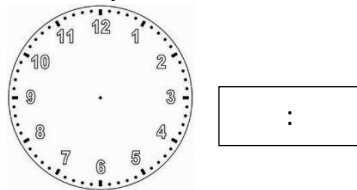
(proflucianabrito@agvaf.edu.pt)

1. Representa em cada relógio as seguintes horas do dia:

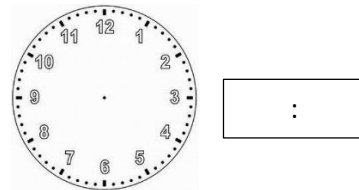
a) Nove horas



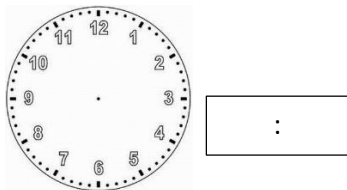
b) Dez e um quarto



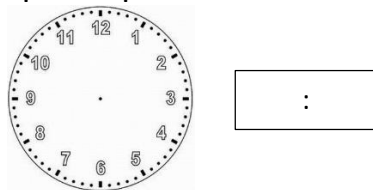
c) Meio dia



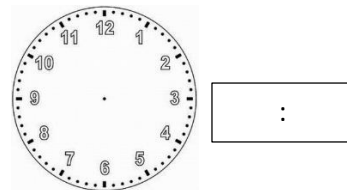
d) Três e trinta da tarde



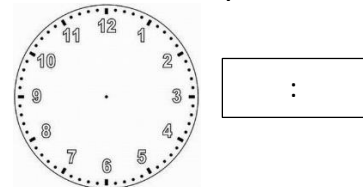
e) Um quarto para as seis da tarde



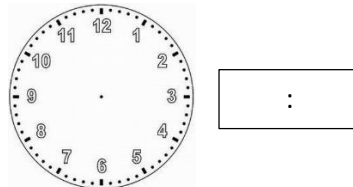
f) Vinte horas e meia





g) Nove horas e quarenta e um minutos



h) Meia noite e 3 minutos



2. Observa os relógios e escreve as horas correspondentes.



3. A Susana observou o ponteiro dos minutos de um relógio a mover-se do 7, quando começou a estudar, até ao 3, quando parou para lanchar. Durante quanto tempo esteve a Susana a estudar antes do lanche?



